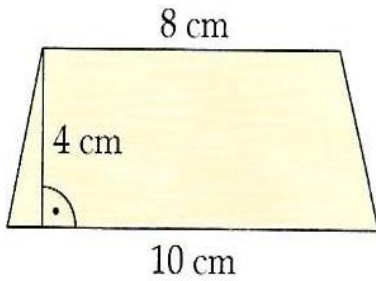


TEMAT: POLE TRAPEZU – ROZWIĄZYWANIE ZADAŃ

Oblicz pola poniższych trapezów;

a.



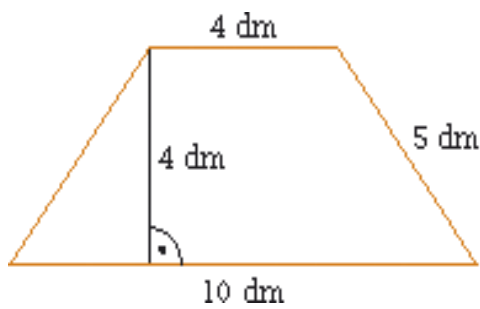
a =

b =

h =

P =

b.



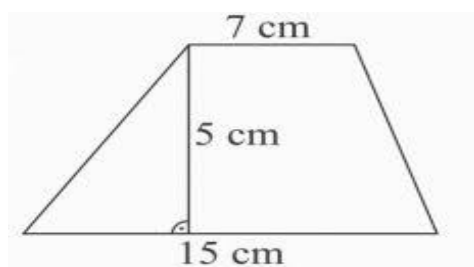
a =

b =

h =

P =

c.



a =

b =

h =

P =